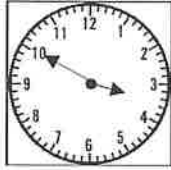


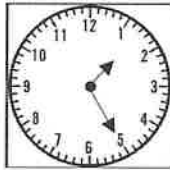
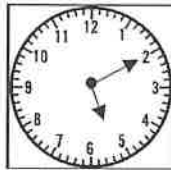








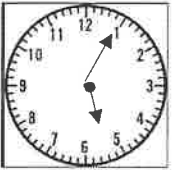
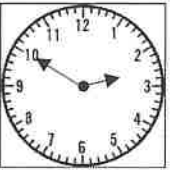









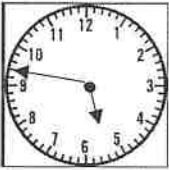
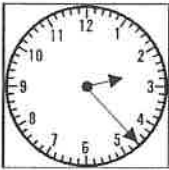











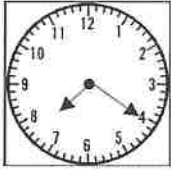

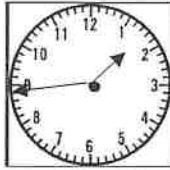
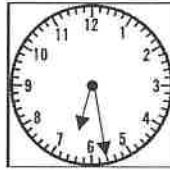
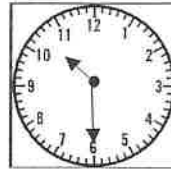







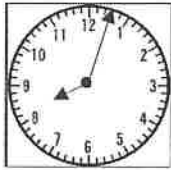
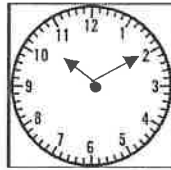
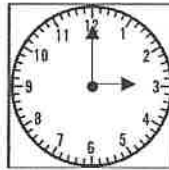
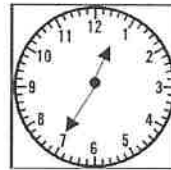









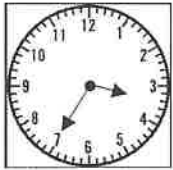
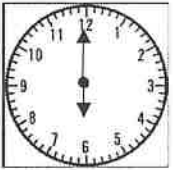
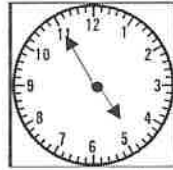
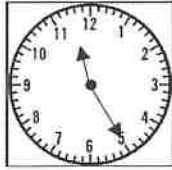
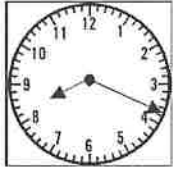






Monday	Tuesday	Wednesday	Thursday	Friday
<p>What time is it?</p>  <p>_____ : _____</p>	<p>What time is it?</p>  <p>_____ : _____</p>	<p>What time is it?</p>  <p>_____ : _____</p>	<p>What time is it?</p>  <p>_____ : _____</p>	<p>What time is it?</p>  <p>_____ : _____</p>
<p>How much is each coin worth?</p>  <p>_____ ¢ _____ ¢</p>  <p>_____ ¢ _____ ¢</p>	<p>How much are the coins worth?</p>  <p>_____ ¢</p>	<p>How much are the coins worth?</p>  <p>_____ ¢</p>	<p>How much are the coins worth?</p>  <p>_____ ¢</p>	<p>How much are the coins worth?</p>  <p>_____ ¢</p>
<p>Circle the answer.</p> <p>537</p> <p>EVEN or ODD</p>	<p>Circle the answer.</p> <p>328</p> <p>EVEN or ODD</p>	<p>Circle the answer.</p> <p>1,426</p> <p>EVEN or ODD</p>	<p>Circle the answer.</p> <p>3,789</p> <p>EVEN or ODD</p>	<p>Circle the answer.</p> <p>4,370</p> <p>EVEN or ODD</p>
<p>3,729</p> <p>Circle the number in the hundreds place.</p>	<p>3,729</p> <p>Circle the number in the ones place.</p>	<p>3,729</p> <p>Circle the number in the thousands place.</p>	<p>3,729</p> <p>Circle the number in the tens place.</p>	<p>What is the value of the underlined number?</p> <p><u>3</u>,729</p> <p>7 or 700</p>
<p>Use: <, >, or =</p> <p>397 _____ 299</p>	<p>Use: <, >, or =</p> <p>729 _____ 792</p>	<p>Use: <, >, or =</p> <p>613 _____ 361</p>	<p>Use: <, >, or =</p> <p>481 _____ 418</p>	<p>Use: <, >, or =</p> <p>627 _____ 276</p>
<p>Solve.</p> <p>587 747</p> <p>+ 295 - 198</p>	<p>Solve.</p> <p>487 542</p> <p>+ 233 - 258</p>	<p>Solve.</p> <p>837 319</p> <p>+ 87 - 137</p>	<p>Solve.</p> <p>592 736</p> <p>+ 334 - 394</p>	<p>Solve.</p> <p>772 841</p> <p>+ 295 - 268</p>
<p>What comes next?</p> <p>678, _____, _____</p>	<p>What comes next?</p> <p>119, _____, _____</p>	<p>What comes next?</p> <p>801, _____, _____</p>	<p>What comes next?</p> <p>423, _____, _____</p>	<p>What comes next?</p> <p>399, _____, _____</p>
<p>What comes before?</p> <p>_____, _____, 934</p>	<p>What comes before?</p> <p>_____, _____, 220</p>	<p>What comes before?</p> <p>_____, _____, 348</p>	<p>What comes before?</p> <p>_____, _____, 500</p>	<p>What comes before?</p> <p>_____, _____, 701</p>
<p>Missing number.</p> <p>15 + _____ = 25</p>	<p>Missing number.</p> <p>14 - _____ = 8</p>	<p>Missing number.</p> <p>12 + _____ = 19</p>	<p>Balanced equations.</p> <p>8+9 = 3+ _____</p>	<p>Balanced equations.</p> <p>5+3 = 4+ _____</p>


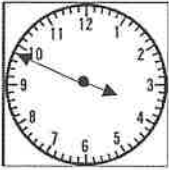

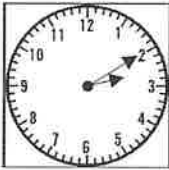











Monday	Tuesday	Wednesday	Thursday	Friday
<p>What time is it?</p>  <p>_____ : _____</p>	<p>What time is it?</p>  <p>_____ : _____</p>	<p>What time is it?</p>  <p>_____ : _____</p>	<p>What time is it?</p>  <p>_____ : _____</p>	<p>What time is it?</p>  <p>_____ : _____</p>
<p>How much is each coin worth?</p>  <p>_____ ¢ _____ ¢</p>  <p>_____ ¢ _____ ¢</p>	<p>How much are the coins worth?</p>  <p>_____ ¢</p>	<p>How much are the coins worth?</p>  <p>_____ ¢</p>	<p>How much are the coins worth?</p>  <p>_____ ¢</p>	<p>How much are the coins worth?</p>  <p>_____ ¢</p>
<p>Circle the answer.</p> <p style="text-align: center;">241</p> <p>EVEN or ODD</p>	<p>Circle the answer.</p> <p style="text-align: center;">538</p> <p>EVEN or ODD</p>	<p>Circle the answer.</p> <p style="text-align: center;">2,420</p> <p>EVEN or ODD</p>	<p>Circle the answer.</p> <p style="text-align: center;">719</p> <p>EVEN or ODD</p>	<p>Circle the answer.</p> <p style="text-align: center;">8,377</p> <p>EVEN or ODD</p>
<p style="text-align: center;">8,154</p> <p>Circle the number in the hundreds place.</p>	<p style="text-align: center;">8,154</p> <p>Circle the number in the ones place.</p>	<p style="text-align: center;">8,154</p> <p>Circle the number in the thousands place.</p>	<p style="text-align: center;">8,154</p> <p>Circle the number in the tens place.</p>	<p>What is the value of the underlined number?</p> <p style="text-align: center;">8,<u>1</u>54</p> <p>50 or 5</p>
<p>Use: <, >, or =</p> <p>58 _____ 85</p>	<p>Use: <, >, or =</p> <p>702 _____ 720</p>	<p>Use: <, >, or =</p> <p>973 _____ 973</p>	<p>Use: <, >, or =</p> <p>109 _____ 98</p>	<p>Use: <, >, or =</p> <p>607 _____ 706</p>
<p>Solve.</p> <p style="text-align: center;">496 325</p> <p>+ 287 - 274</p>	<p>Solve.</p> <p style="text-align: center;">583 734</p> <p>+ 348 - 368</p>	<p>Solve.</p> <p style="text-align: center;">945 856</p> <p>+ 78 - 279</p>	<p>Solve.</p> <p style="text-align: center;">793 837</p> <p>+ 265 - 274</p>	<p>Solve.</p> <p style="text-align: center;">628 738</p> <p>+ 877 - 243</p>
<p>What comes next?</p> <p>523, _____, _____</p>	<p>What comes next?</p> <p>359, _____, _____</p>	<p>What comes next?</p> <p>201, _____, _____</p>	<p>What comes next?</p> <p>98, _____, _____</p>	<p>What comes next?</p> <p>999, _____, _____</p>
<p>What comes before?</p> <p>_____, _____, 135</p>	<p>What comes before?</p> <p>_____, _____, 230</p>	<p>What comes before?</p> <p>_____, _____, 973</p>	<p>What comes before?</p> <p>_____, _____, 900</p>	<p>What comes before?</p> <p>_____, _____, 201</p>
<p>Missing number.</p> <p>11 + _____ = 19</p>	<p>Missing number.</p> <p>19 - _____ = 13</p>	<p>Missing number.</p> <p>8 + _____ = 17</p>	<p>Balanced equations.</p> <p>12+5 = 7+ _____</p>	<p>Balanced equations.</p> <p>6+8 = 9+ _____</p>

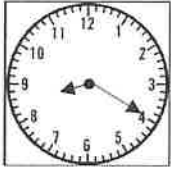


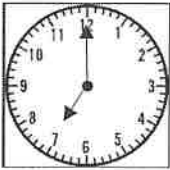







Monday	Tuesday	Wednesday	Thursday	Friday
What time is it?  _____ : _____	What time is it?  _____ : _____	What time is it?  _____ : _____	What time is it?  _____ : _____	What time is it?  _____ : _____
How much is each coin worth?  _____ ¢ _____ ¢  _____ ¢ _____ ¢	How much are the coins worth?  _____ ¢  _____ ¢	How much are the coins worth?  _____ ¢  _____ ¢	How much are the coins worth?  _____ ¢  _____ ¢	How much are the coins worth?  _____ ¢  _____ ¢
Circle the answer. 72 EVEN or ODD	Circle the answer. 891 EVEN or ODD	Circle the answer. 4,726 EVEN or ODD	Circle the answer. 309 EVEN or ODD	Circle the answer. 6,325 EVEN or ODD
7,305 Circle the number in the <u>hundreds</u> place. Use: <, >, or = 95 _____ 59	7,305 Circle the number in the <u>ones</u> place. Use: <, >, or = 632 _____ 632	7,305 Circle the number in the <u>thousands</u> place. Use: <, >, or = 139 _____ 193	7,305 Circle the number in the <u>tens</u> place. Use: <, >, or = 81 _____ 108	What is the value of the underlined number? 7,3<u>0</u>5 5 or 50 Use: <, >, or = 798 _____ 789
Solve. $\begin{array}{r} 368 \\ + 285 \\ \hline \end{array}$ $\begin{array}{r} 639 \\ - 278 \\ \hline \end{array}$	Solve. $\begin{array}{r} 868 \\ + 554 \\ \hline \end{array}$ $\begin{array}{r} 753 \\ - 327 \\ \hline \end{array}$	Solve. $\begin{array}{r} 448 \\ + 65 \\ \hline \end{array}$ $\begin{array}{r} 527 \\ - 286 \\ \hline \end{array}$	Solve. $\begin{array}{r} 697 \\ + 324 \\ \hline \end{array}$ $\begin{array}{r} 553 \\ - 84 \\ \hline \end{array}$	Solve. $\begin{array}{r} 564 \\ + 487 \\ \hline \end{array}$ $\begin{array}{r} 850 \\ - 437 \\ \hline \end{array}$
What comes next? 267, _____, _____	What comes next? 559, _____, _____	What comes next? 756, _____, _____	What comes next? 438, _____, _____	What comes next? 799, _____, _____
What comes before? _____, _____, 279	What comes before? _____, _____, 780	What comes before? _____, _____, 842	What comes before? _____, _____, 700	What comes before? _____, _____, 401
Missing number. $7 + \underline{\quad} = 15$	Missing number. $13 - \underline{\quad} = 8$	Missing number. $9 + \underline{\quad} = 16$	Balanced equations. $3+8 = 6+ \underline{\quad}$	Balanced equations. $15+4 = 7+ \underline{\quad}$

Monday	Tuesday	Wednesday	Thursday	Friday
What time is it?  _____ : _____	What time is it?  _____ : _____	What time is it?  _____ : _____	What time is it?  _____ : _____	What time is it?  _____ : _____
How much is each coin worth?  _____ ¢ _____ ¢  _____ ¢ _____ ¢	How much are the coins worth?  _____ ¢	How much are the coins worth?  _____ ¢	How much are the coins worth?  _____ ¢	How much are the coins worth?  _____ ¢
Circle the answer. 92 EVEN or ODD	Circle the answer. 258 EVEN or ODD	Circle the answer. 8,421 EVEN or ODD	Circle the answer. 780 EVEN or ODD	Circle the answer. 2,963 EVEN or ODD
Circle the number in the hundreds place. 4,918	Circle the number in the ones place. 4,918	Circle the number in the thousands place. 4,918	Circle the number in the tens place. 4,918	What is the value of the underlined number? <u>4,918</u> 4,000 or 4
Use: <, >, or = 23 _____ 32	Use: <, >, or = 801 _____ 810	Use: <, >, or = 705 _____ 570	Use: <, >, or = 91 _____ 104	Use: <, >, or = 276 _____ 276
Solve. $\begin{array}{r} 295 \\ + 280 \\ \hline \end{array}$ $\begin{array}{r} 468 \\ - 199 \\ \hline \end{array}$	Solve. $\begin{array}{r} 487 \\ + 233 \\ \hline \end{array}$ $\begin{array}{r} 651 \\ - 237 \\ \hline \end{array}$	Solve. $\begin{array}{r} 549 \\ + 76 \\ \hline \end{array}$ $\begin{array}{r} 809 \\ - 237 \\ \hline \end{array}$	Solve. $\begin{array}{r} 784 \\ + 356 \\ \hline \end{array}$ $\begin{array}{r} 704 \\ - 65 \\ \hline \end{array}$	Solve. $\begin{array}{r} 773 \\ + 227 \\ \hline \end{array}$ $\begin{array}{r} 932 \\ - 356 \\ \hline \end{array}$
What comes next? 538, _____, _____	What comes next? 579, _____, _____	What comes next? 621, _____, _____	What comes next? 178, _____, _____	What comes next? 899, _____, _____
What comes before? _____, _____, 574	What comes before? _____, _____, 670	What comes before? _____, _____, 916	What comes before? _____, _____, 300	What comes before? _____, _____, 601
Missing number. 17 + _____ = 20	Missing number. 19 - _____ = 6	Missing number. 7 + _____ = 13	Balanced equations. 8+5 = 3+ _____	Balanced equations. 9+2 = 4+ _____

Monday	Tuesday	Wednesday	Thursday	Friday
<p>What time is it?</p>  <p>_____ : _____</p>	<p>What time is it?</p>  <p>_____ : _____</p>	<p>What time is it?</p>  <p>_____ : _____</p>	<p>What time is it?</p>  <p>_____ : _____</p>	<p>What time is it?</p>  <p>_____ : _____</p>
<p>How much is each coin worth?</p>  <p>_____ ¢ _____ ¢</p>  <p>_____ ¢ _____ ¢</p>	<p>How much are the coins worth?</p>  <p>_____ ¢</p>  <p>_____ ¢</p>	<p>How much are the coins worth?</p>  <p>_____ ¢</p>	<p>How much are the coins worth?</p>  <p>_____ ¢</p>	<p>How much are the coins worth?</p>  <p>_____ ¢</p>
<p>Circle the answer.</p> <p style="text-align: center;">47</p> <p>EVEN or ODD</p>	<p>Circle the answer.</p> <p style="text-align: center;">190</p> <p>EVEN or ODD</p>	<p>Circle the answer.</p> <p style="text-align: center;">3,026</p> <p>EVEN or ODD</p>	<p>Circle the answer.</p> <p style="text-align: center;">789</p> <p>EVEN or ODD</p>	<p>Circle the answer.</p> <p style="text-align: center;">1,853</p> <p>EVEN or ODD</p>
<p style="text-align: center;">6,780</p> <p>Circle the number in the hundreds place.</p>	<p style="text-align: center;">6,780</p> <p>Circle the number in the ones place.</p>	<p style="text-align: center;">6,780</p> <p>Circle the number in the thousands place.</p>	<p style="text-align: center;">6,780</p> <p>Circle the number in the tens place.</p>	<p>What is the value of the underlined number?</p> <p style="text-align: center;">6,<u>7</u>80</p> <p>8 or 80</p>
<p>Use: <, >, or =</p> <p>87 _____ 78</p>	<p>Use: <, >, or =</p> <p>699 _____ 609</p>	<p>Use: <, >, or =</p> <p>442 _____ 424</p>	<p>Use: <, >, or =</p> <p>987 _____ 987</p>	<p>Use: <, >, or =</p> <p>1,627 _____ 1,276</p>
<p>Solve.</p> <p style="text-align: center;">249 723</p> <p>+ 268 - 591</p>	<p>Solve.</p> <p style="text-align: center;">562 960</p> <p>+ 338 - 653</p>	<p>Solve.</p> <p style="text-align: center;">275 504</p> <p>+ 46 - 283</p>	<p>Solve.</p> <p style="text-align: center;">837 642</p> <p>+ 595 - 53</p>	<p>Solve.</p> <p style="text-align: center;">772 650</p> <p>+ 449 - 324</p>
<p>What comes next?</p> <p>768, _____, _____</p>	<p>What comes next?</p> <p>439, _____, _____</p>	<p>What comes next?</p> <p>532, _____, _____</p>	<p>What comes next?</p> <p>598, _____, _____</p>	<p>What comes next?</p> <p>699, _____, _____</p>
<p>What comes before?</p> <p>_____, _____, 359</p>	<p>What comes before?</p> <p>_____, _____, 350</p>	<p>What comes before?</p> <p>_____, _____, 237</p>	<p>What comes before?</p> <p>_____, _____, 100</p>	<p>What comes before?</p> <p>_____, _____, 801</p>
<p>Missing number.</p> <p>11 + _____ = 18</p>	<p>Missing number.</p> <p>20 - _____ = 4</p>	<p>Missing number.</p> <p>6 + _____ = 13</p>	<p>Balanced equations.</p> <p>13+6 = 7+ _____</p>	<p>Balanced equations.</p> <p>5+9 = 6+ _____</p>

Monday	Tuesday	Wednesday	Thursday	Friday
What time is it?  _____ : _____	What time is it?  _____ : _____	What time is it?  _____ : _____	What time is it?  _____ : _____	What time is it?  _____ : _____
How much is each coin worth?  _____ ¢ _____ ¢  _____ ¢ _____ ¢	How much are the coins worth?  _____ ¢	How much are the coins worth?  _____ ¢	How much are the coins worth?  _____ ¢	How much are the coins worth?  _____ ¢
Circle the answer. 63 EVEN or ODD	Circle the answer. 421 EVEN or ODD	Circle the answer. 9,225 EVEN or ODD	Circle the answer. 790 EVEN or ODD	Circle the answer. 3,702 EVEN or ODD
4,503 Circle the number in the <u>hundreds</u> place. Use: <, >, or = 68 _____ 86	4,503 Circle the number in the <u>ones</u> place. Use: <, >, or = 135 _____ 531	4,503 Circle the number in the <u>thousands</u> place. Use: <, >, or = 637 _____ 376	4,503 Circle the number in the <u>tens</u> place. Use: <, >, or = 99 _____ 109	What is the value of the underlined number? <u>4</u> ,503 4 or 4,000 Use: <, >, or = 1,735 _____ 735
Solve. $\begin{array}{r} 329 \\ + 283 \\ \hline \end{array}$ $\begin{array}{r} 926 \\ - 708 \\ \hline \end{array}$	Solve. $\begin{array}{r} 465 \\ + 283 \\ \hline \end{array}$ $\begin{array}{r} 648 \\ - 274 \\ \hline \end{array}$	Solve. $\begin{array}{r} 526 \\ + 49 \\ \hline \end{array}$ $\begin{array}{r} 820 \\ - 674 \\ \hline \end{array}$	Solve. $\begin{array}{r} 383 \\ + 446 \\ \hline \end{array}$ $\begin{array}{r} 567 \\ - 94 \\ \hline \end{array}$	Solve. $\begin{array}{r} 1,833 \\ + 478 \\ \hline \end{array}$ $\begin{array}{r} 642 \\ - 258 \\ \hline \end{array}$
What comes next? 258, _____, _____	What comes next? 349, _____, _____	What comes next? 1,031, _____, _____	What comes next? 718, _____, _____	What comes next? 499, _____, _____
What comes before? _____, _____, 522	What comes before? _____, _____, 130	What comes before? _____, _____, 407	What comes before? _____, _____, 800	What comes before? _____, _____, 201
Missing number. 9 + _____ = 15	Missing number. 19 - _____ = 10	Missing number. 13 + _____ = 18	Balanced equations. 7+9 = 3+ _____	Balanced equations. 11+3 = 8+ _____

Monday	Tuesday	Wednesday	Thursday	Friday
What time is it?  _____ : _____	What time is it?  _____ : _____	What time is it?  _____ : _____	What time is it?  _____ : _____	What time is it?  _____ : _____
How much is each coin worth?  _____ ¢ _____ ¢  _____ ¢ _____ ¢	How much are the coins worth?  _____ ¢  _____ ¢	How much are the coins worth?  _____ ¢  _____ ¢	How much are the coins worth?  _____ ¢  _____ ¢	How much are the coins worth?  _____ ¢  _____ ¢
Circle the answer. 84 EVEN or ODD	Circle the answer. 703 EVEN or ODD	Circle the answer. 5,729 EVEN or ODD	Circle the answer. 26 EVEN or ODD	Circle the answer. 6,334 EVEN or ODD
6,083 Circle the number in the <u>hundreds</u> place. Use: <, >, or = 75 _____ 57	6,083 Circle the number in the <u>ones</u> place. Use: <, >, or = 594 _____ 495	6,083 Circle the number in the <u>thousands</u> place. Use: <, >, or = 380 _____ 381	6,083 Circle the number in the <u>tens</u> place. Use: <, >, or = 1,237 _____ 974	What is the value of the underlined number? 6,<u>0</u>83 100 or 0 Use: <, >, or = 1,427 _____ 1,742
Solve. $\begin{array}{r} 1,487 \\ + 795 \\ \hline \end{array}$ $\begin{array}{r} 738 \\ - 586 \\ \hline \end{array}$	Solve. $\begin{array}{r} 687 \\ + 254 \\ \hline \end{array}$ $\begin{array}{r} 242 \\ - 94 \\ \hline \end{array}$	Solve. $\begin{array}{r} 837 \\ + 87 \\ \hline \end{array}$ $\begin{array}{r} 319 \\ - 137 \\ \hline \end{array}$	Solve. $\begin{array}{r} 1,402 \\ + 399 \\ \hline \end{array}$ $\begin{array}{r} 846 \\ - 387 \\ \hline \end{array}$	Solve. $\begin{array}{r} 572 \\ + 284 \\ \hline \end{array}$ $\begin{array}{r} 1,243 \\ - 357 \\ \hline \end{array}$
What comes next? 178, _____, _____	What comes next? 819, _____, _____	What comes next? 705, _____, _____	What comes next? 368, _____, _____	What comes next? 299, _____, _____
What comes before? _____, _____, 743	What comes before? _____, _____, 320	What comes before? _____, _____, 917	What comes before? _____, _____, 600	What comes before? _____, _____, 301
Missing number. $12 + \underline{\quad} = 16$	Missing number. $13 - \underline{\quad} = 5$	Missing number. $7 + \underline{\quad} = 12$	Balanced equations. $8+7 = 10+ \underline{\quad}$	Balanced equations. $15+3 = 9+ \underline{\quad}$

Monday	Tuesday	Wednesday	Thursday	Friday
What time is it?  _____ : _____	What time is it?  _____ : _____	What time is it?  _____ : _____	What time is it?  _____ : _____	What time is it?  _____ : _____
How much is each coin worth?  _____ ¢ _____ ¢  _____ ¢ _____ ¢	How much are the coins worth?  _____ ¢	How much are the coins worth?  _____ ¢	How much are the coins worth?  _____ ¢	How much are the coins worth?  _____ ¢
Circle the answer. 70 EVEN or ODD	Circle the answer. 301 EVEN or ODD	Circle the answer. 498 EVEN or ODD	Circle the answer. 5,112 EVEN or ODD	Circle the answer. 7,623 EVEN or ODD
1,632 Circle the number in the hundreds place.	1,632 Circle the number in the ones place.	1,632 Circle the number in the thousands place.	1,632 Circle the number in the tens place.	What is the value of the underlined number? 1,6<u>3</u>2 30 or 3
Use: <, >, or = 72 _____ 27	Use: <, >, or = 261 _____ 309	Use: <, >, or = 321 _____ 321	Use: <, >, or = 863 _____ 1,018	Use: <, >, or = 1,562 _____ 1,625
Solve. $\begin{array}{r} 673 \\ + 248 \\ \hline \end{array}$ $\begin{array}{r} 526 \\ - 329 \\ \hline \end{array}$	Solve. $\begin{array}{r} 1,497 \\ + 355 \\ \hline \end{array}$ $\begin{array}{r} 538 \\ - 267 \\ \hline \end{array}$	Solve. $\begin{array}{r} 447 \\ + 58 \\ \hline \end{array}$ $\begin{array}{r} 1,325 \\ - 276 \\ \hline \end{array}$	Solve. $\begin{array}{r} 793 \\ + 384 \\ \hline \end{array}$ $\begin{array}{r} 426 \\ - 83 \\ \hline \end{array}$	Solve. $\begin{array}{r} 957 \\ + 653 \\ \hline \end{array}$ $\begin{array}{r} 708 \\ - 259 \\ \hline \end{array}$
What comes next? 468, _____, _____	What comes next? 179, _____, _____	What comes next? 423, _____, _____	What comes next? 358, _____, _____	What comes next? 799, _____, _____
What comes before? _____, _____, 175	What comes before? _____, _____, 540	What comes before? _____, _____, 292	What comes before? _____, _____, 400	What comes before? _____, _____, 501
Missing number. 14 + _____ = 17	Missing number. 17 - _____ = 4	Missing number. 15 + _____ = 20	Balanced equations. 7+2 = 4+ _____	Balanced equations. 13+5 = 8+ _____